


## Fractions

Cut the shapes into the fraction. Shade in the fraction.  
Then tell what the fraction is using words like halves, thirds, whole etc..



1.  $\frac{4}{4}$

\_\_\_\_\_



2.  $\frac{1}{2}$

\_\_\_\_\_



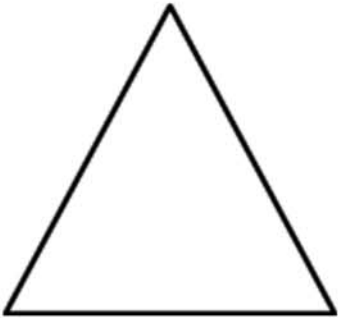
3.  $\frac{3}{4}$

\_\_\_\_\_




4.  $\frac{1}{4}$

\_\_\_\_\_



5.  $\frac{1}{2}$

\_\_\_\_\_



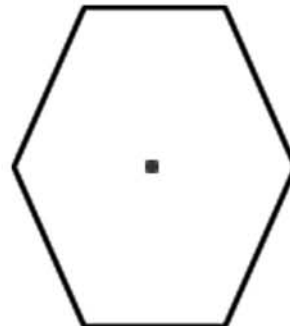
6.  $\frac{2}{2}$

\_\_\_\_\_



7.  $\frac{3}{3}$

\_\_\_\_\_



8.  $\frac{5}{6}$

\_\_\_\_\_